

**JKG International School, Indirapuram**  
**Holiday Homework :(2018-19)**  
**Class: III**  
**Subject : English**

Name: \_\_\_\_\_ Sec: \_\_\_\_\_ Date: \_\_\_\_\_

**Q1. Write a paragraph on the given picture with the help of given words .Also give it a suitable title.**



Winter season----foggy weather-----snow man ----- snowfall ----- Christmas ----- winter break----- ample time for revision-----visit relatives-----enjoy the cold season etc.

\_\_\_\_\_

---

---

---

---

---

---

---

---

---

---

---

---

---

---

---

**Q2. Write a letter to your friend to invite him/her for a new year party:**

---

---

---

---

---

---

---

---

---

---

---

---

---

---

---

---

---

---

जेकेजी इंटरनेशनल स्कूल, इंदिरापुरम  
शीतकालीन अवकाश कार्य (2018-19)  
कक्षा – तीन  
विषय – हिंदी

प्र०1 दिये गये अपठित गद्यांश को पढ़कर पूछे गए प्रश्नों के उत्तर दीजिए।

पेड़-पौधों से हमें भोजन प्राप्त होता है। अन्न, सब्जियाँ, फल, कागज, वस्त्र आदि पौधों से ही मिलते हैं। जीवित रहने के लिए भोजन और प्राण वायु (ऑक्सीजन) पेड़-पौधों से ही प्राप्त होती है। पेड़-पौधों से हमें लकड़ी भी मिलती है। इसका प्रयोग फर्नीचर तथा घर आदि बनाने में होता है। जहाँ पेड़ अधिक होते हैं, वहाँ वर्षा भी अधिक होती है।

(क) भोजन किससे प्राप्त होता है?

---

(ख) लकड़ी से क्या बनाया जाता है?

---

(ग) वर्षा कहाँ अधिक होती है?

---

(घ) जीवित रहने के लिए कौन सी प्राण वायु की आवश्यकता है?

---

(ङ) दिए गए शब्दों के पर्यायवाची शब्द लिखिए –

(i) पेड़ – \_\_\_\_\_ (ii) वायु – \_\_\_\_\_

प्र०2 दी गयी कविता की पंक्तियाँ पढ़कर पूछे गए प्रश्नों के उत्तर लिखिए–

रिमझिम-रिमझिम-सी बूँदें

जग के आँगन में आई,

अपने लघु उज्ज्वल तन में

कितनी सुंदरता लाई।

मेघों ने गरज-गरजकर

मादक संगीत सुनाया,




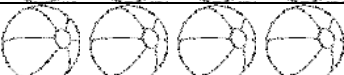
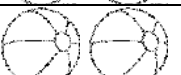
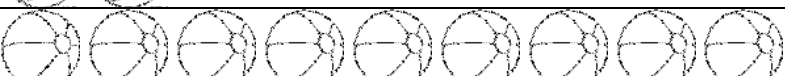
इस हरी-भरी संध्या ने

हमको उन्मत्त बनाया।





**Q3. The pictograph given below represents the no. of wickets taken by the bowlers of a team in a school tournament. Study the pictograph carefully and answer the following questions.**

Bowlers	 = 2 Wickets
Prashant	
Amit	
Sujeet	
Aman	
Abhudaya	

a) Which bowler took the maximum number of wickets?

Ans \_\_\_\_\_

b) Which bowler took the minimum number of wickets?

Ans \_\_\_\_\_

c) How many wickets were taken by Aman during the tournament?

Ans \_\_\_\_\_

**Q4. Draw a bar graph for the given data.**

Vegetables	Peas	Cabbage	Potato	Carrot
No. of Children	6	8	7	5

**JKG International School, Indirapuram**  
**Holiday Homework :(2018-19)**  
**Class: III**  
**Subject: EVS**

**Name-** \_\_\_\_\_ **Sec**\_\_\_\_\_ **Date**\_\_\_\_\_

**Q1. Fill in the blanks.**

- a) The tailor bird makes its nest by sewing \_\_\_\_\_ leaves together .
- b) \_\_\_\_\_ is the addition of harmful things to the environment.
- c) Fish swim with the help of fins and \_\_\_\_\_.
- d) The brightest star in the sky is \_\_\_\_\_.
- e) 'Big Dipper' constellation is known by this name in India \_\_\_\_\_.
- f) The Process of changing water vapour into water is called \_\_\_\_\_.
- g) Flowing water and \_\_\_\_\_ are the unique features of our earth.
- h) The sunlight reaches the earth in \_\_\_\_\_ minutes.

**Q2. Give reason.**

- a) Ice floats on water.

---

---

- b) Our Earth is called the blue planet.

---

---

- c) Animals are also living things.

---

---

**Q3. Circle the odd one out.**

- |               |             |              |
|---------------|-------------|--------------|
| a) Monsoon    | Evaporation | Condensation |
| b) Well       | Handpump    | Lake         |
| c) Mars       | Jupiter     | Sun          |
| d) Fish       | Turtle      | Bird         |
| e) Herbivores | Carnivores  | Trees        |

**Q4. Correct and rewrite the following sentences.**

- a) Birds use their feet and claws for catching and holding ball.

---

- b) Herbivores eat only flesh of other animals.

---

- c) Air gets polluted by seasons.

---

- d) The Earth completes one revolution in 265 days and 6 hours.

---

- e) The Sun shines brightly in monsoon season.

---

**Q5. Answer the following questions.**

- a) What makes the earth a unique planet ?

---

---

- b) Define Condensation.

---

---



c) How does Sun help in the making of clouds ?

---

---

d) Who are astronomers ?Name the famous astronomer of India .

---

---

e) Which is the natural satellite of earth and why ?

---

---

f) Why can't we see stars during the day time ?

---

---

g) On what factors does the weather depend? ?

---

---

**Q6. Write two- two examples for each :**

- |                             |       |       |
|-----------------------------|-------|-------|
| a) Surface water            | _____ | _____ |
| b) Underground water        | _____ | _____ |
| c) Constellation            | _____ | _____ |
| d) Diseases by polluted air | _____ | _____ |
| e) Scavengers               | _____ | _____ |
| f) Omnivores                | _____ | _____ |
| g) Perching birds           | _____ | _____ |
| h) Herbivores               | _____ | _____ |

**Q7. Draw and label any food chain .**

**Q8. Draw and label water cycle.**